



INDIAN SCHOOL AL WADI AL KABIR
DEPARTMENT OF EVS [2023 – 2024]






LESSON: Moving Here and There

WORKSHEET -2

RESOURCE PERSON: Annie Mathew

NAME: _____ CLASS: III SEC: _____ DATE: _____

I. Match the community helpers to the transportation they use.

1. doctor	a. 
2. fire fighter	b. 
3. astronaut	c. 
4. postman	d. 
5. janitor	e. 

1. _____ 2. _____ 3. _____ 4. _____ 5. _____

II. State whether the following statements are TRUE or FALSE.

1. Air transport is the fastest mode of transport . _____
3. The smoke from vehicles causes noise pollution. _____
4. A motor cycle uses petrol as its source of energy. _____
5. We must not check or service our vehicles regularly. _____

III. Write two examples for each of the following.

- a. Means of air transport _____
- b. Sources of energy for vehicles _____
- c. Vehicles with two wheels _____

IV. Observe the given pictures carefully and answer the questions.

1. Write any two ways in which we can reduce air pollution?



2. a. Name this means of transport.



b. Why is it used in big cities?
